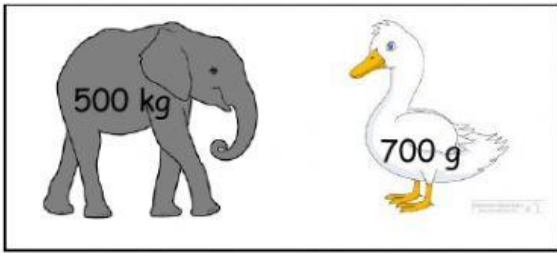



a) Compare the mass of each pair and click on the heavier mass.



500 kilograms

700 grams



600 grams

6 kilograms

b) Look at the mass and choose the correct answer



15 kg

The mass of the boy is



200 g

The mass of the walking stick is

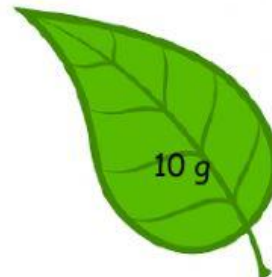
c) Listen to the voice-over and state 'True' or 'False'



2 kg

True

False



10 g

True

False