

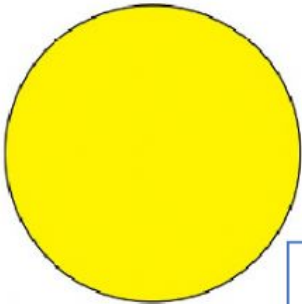


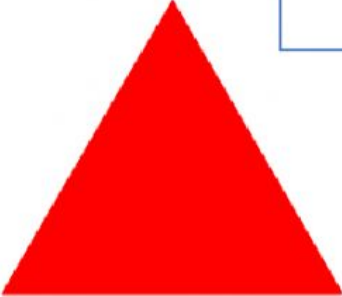








Write the fractions and add the fractions. (Half and 1 whole)

<div><input type="text"/></div> <div></div> <div>+</div> <div></div> <div>=</div> <div><input type="text"/></div>	<div></div> <div><input type="text"/></div>
<div><input type="text"/></div> <div></div> <div>+</div> <div></div> <div>=</div> <div><input type="text"/></div>	<div></div> <div><input type="text"/></div>
<div><input type="text"/></div> <div></div> <div>+</div> <div></div> <div>=</div> <div><input type="text"/></div>	<div></div> <div><input type="text"/></div>
<div><input type="text"/></div> <div></div> <div>+</div> <div></div> <div>=</div> <div><input type="text"/></div>	<div></div> <div><input type="text"/></div>