




Mixed numbers

Date: _____






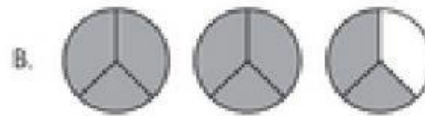
Name: _____



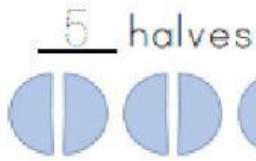
Write the **mixed numeral** for the following:



$2\frac{1}{2}$



Representing Fractions



Show on a number line

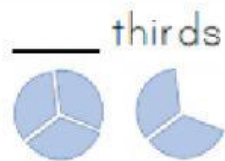


Improper fraction

$$\frac{\boxed{5}}{\boxed{2}}$$

Mixed number

$$\boxed{2} \frac{\boxed{1}}{\boxed{2}}$$



Show on a number line

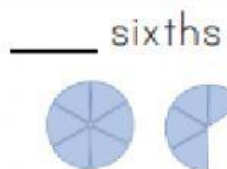


Improper fraction

$$\frac{\boxed{\quad}}{\boxed{3}}$$

Mixed number

$$\boxed{\quad} \frac{\boxed{\quad}}{\boxed{3}}$$



Show on a number line

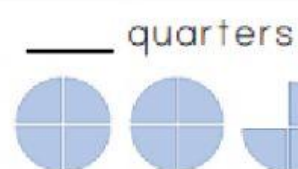


Improper fraction

$$\frac{\boxed{\quad}}{\boxed{6}}$$

Mixed number

$$\boxed{\quad} \frac{\boxed{\quad}}{\boxed{6}}$$



Show on a number line

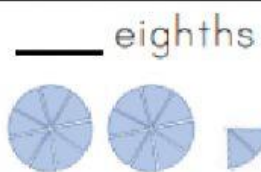


Improper fraction

$$\frac{\boxed{\quad}}{\boxed{4}}$$

Mixed number

$$\boxed{\quad} \frac{\boxed{\quad}}{\boxed{4}}$$



Show on a number line

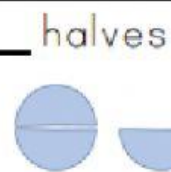


Improper fraction

$$\frac{\boxed{\quad}}{\boxed{8}}$$

Mixed number

$$\boxed{\quad} \frac{\boxed{\quad}}{\boxed{8}}$$



Show on a number line



Improper fraction

$$\frac{\boxed{\quad}}{\boxed{2}}$$

Mixed number

$$\boxed{\quad} \frac{\boxed{\quad}}{\boxed{2}}$$

