

SCHOOL YEAR 2019 - 2020
END-OF-SEMESTER TEST 1
ENGLISH FOR PRIMARY MATHS 2

For pupil:

Full name:
School:
Class:
Date:

For examiner:

Listening Section: _____
Reading & Writing Section: _____
Signature: _____



LISTENING SECTION (15 MINUTES)

PART 1:

Listen and draw lines.

86 10 11 99 29

a

b

c



d

e

PART 2:

Listen and circle.


Example:



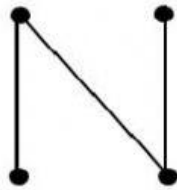
a.



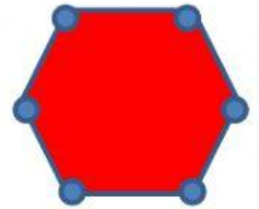
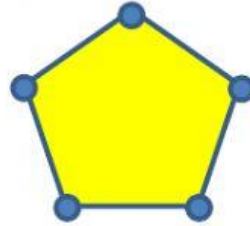
b.



c.



d.

**PART 3:**

Listen and tick.

Example:

$9 + 2 = 11$



$27 - 22 = 5$



a.

$20 - 5 = 15$



$20 - 15 = 5$



b.

$52 - 40 = 12$



$60 - 52 = 8$



c.

$15 + 35 = 40$



$15 + 20 = 35$



d.

$21 - 10 = 11$



$11 - 6 = 5$



PART 4:

Listen and write letters to fill the blank.

Example: This dog is **heavier** than the chicken.

- a. The ruler is l __ nger than the pen.
 b. The girl is shor __ er than the boy.
 c. There are four line s __ gments.
 d. The addends are ten and si __ teen.

**READING AND WRITING SECTION (20 MINUTES)****PART 1:**

Calculate and match.

$10 \text{ cm} + 8 \text{ cm}$

$45 \text{ kg} - 7 \text{ kg}$

$15 \text{ cm} + 35 \text{ cm}$

$83 \text{ dm} - 13 \text{ dm}$

$54 \text{ cm} + 43 \text{ cm}$

5 dm

18 cm

38 kg

97 cm

70 dm

PART 2:

Look and underline the best answer.

Example.

$84 - 19 = 65$

The **subtrahend**/minuend is 84

a.


The triangle has **three**/**four** vertices.

b.

$34 - 12 = 22$

The minuend is **thirty-four**/ **twelve**.

c.



This shape is a **triangle/quadrilateral**.

d.



This pencil is **shorter /longer**.

PART 3:

Read and fill in the blanks.

There are 19 apples in the basket. Mai takes away 6 apples for her grandmother. How many apples are left in the basket?



$$\boxed{19} \bigcirc \boxed{} \bigcirc = \bigcirc \boxed{}$$

There are apples left in the basket.