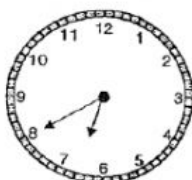




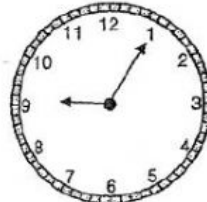


Choose the correct answer

1	<p>Lenny woke up at 7.40. Which clock shows the correct time?</p> <div data-bbox="486 504 1037 896"><div>(1) </div><div>(3) </div><div>(2) </div><div>(4) </div></div>
2.	<p>What is the time shown on the clock?</p> <div data-bbox="654 1030 845 1220"></div> <div data-bbox="438 1232 574 1377"><p>(1) 4.10 (2) 4.50 (3) 5.10 (4) 10.05</p></div>
3	<p>Jack reached his office at the time shown below. What time did he reach office?</p> <div data-bbox="678 1523 885 1724"></div> <div data-bbox="454 1736 582 1870"><p>(1) 1.09 (2) 1.45 (3) 9.01 (4) 9.05</p></div>

4

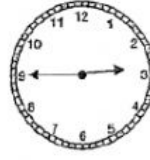
4. Alex, Betty, Cindy and Dan arrived at a party at different times. Who arrived at the party before 2.00?



Alex



Betty



Cindy



Dan

- (1) Alex  
(2) Betty  
(3) Cindy  
(4) Dan

1. Match the names to the correct shapes.



•

• triangle




•

• square



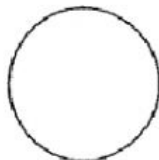
•

• circle




•

• semicircle



•

• quarter circle

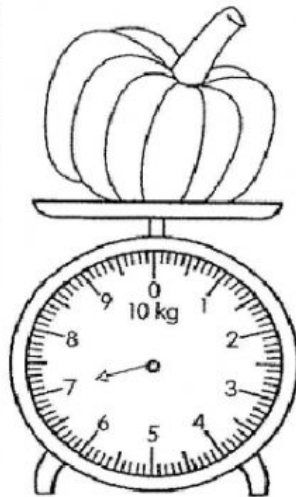


•

• rectangle

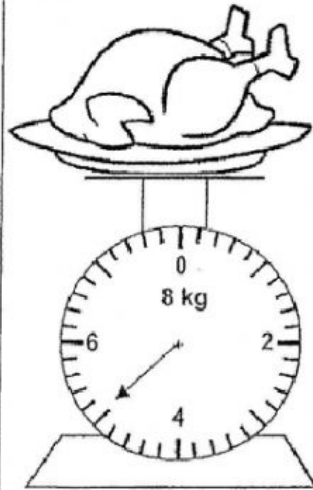
Read each scale. Then, write the mass.

(a) pumpkin



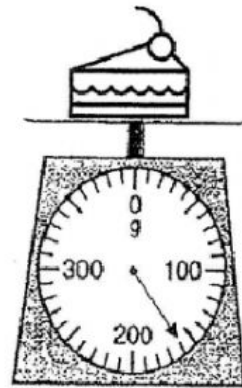
\_\_\_\_\_ kg

(b) turkey



\_\_\_\_\_ kg

(c) slice of cake



\_\_\_\_\_ g

