


Addition Word Problems


Add the objects and select the correct sum.

 Jack has 4 red hearts and 2 blue hearts. How many hearts do he have in all?


$$\begin{array}{c} \text{♥} \quad \text{♥} \\ \text{♥} \quad \text{♥} \end{array} + \begin{array}{c} \text{♥} \quad \text{♥} \end{array} = \begin{array}{c} 8 \\ 6 \end{array}$$

 The boy has 5 balls and the girl has 3 balls.
How many balls do they have altogether?


$$\begin{array}{c} \text{●} \quad \text{●} \quad \text{●} \\ \text{●} \quad \text{●} \end{array} + \text{●} \quad \text{●} \quad \text{●} = \begin{array}{c} 8 \\ 5 \end{array}$$

 There is 1 moon in the sky, 2 more appear.
How many moons are there in total?

$$\text{☾} + \text{☾} \quad \text{☾} = \begin{array}{c} 3 \\ 1 \end{array}$$

 The dress has 3 stars on the front and 5 stars on the back.
How many stars are there in all?

$$\begin{array}{c} \text{★} \quad \text{★} \quad \text{★} \\ \text{★} \end{array} + \begin{array}{c} \text{★} \quad \text{★} \\ \text{★} \quad \text{★} \quad \text{★} \end{array} = \begin{array}{c} 5 \\ 8 \end{array}$$

 There are 2 blue suns and 3 yellow suns.
How many suns are there altogether?

$$\begin{array}{c} \text{☀} \quad \text{☀} \end{array} + \begin{array}{c} \text{☀} \quad \text{☀} \quad \text{☀} \end{array} = \begin{array}{c} 7 \\ 5 \end{array}$$