

Copy of Arrays and Repeated Addition Quiz

Answer the following questions.


1. A row shows the images... *points: 1*

- ☐ From side to side
- ☐ From top to bottom

2. A column shows the images... *points: 1*


- ☐ From side to side
- ☐ From top to bottom

3. How many rows does the following array have? *points: 1*



- ☐ 3
- ☐ 2
- ☐ 6

4. How many columns does the following array have? *points: 1*




- ☐ 4
- ☐ 20
- ☐ 5

5. How many moons are there IN ALL? *points: 1*



- ☐ 2
- ☐ 4
- ☐ 8

6. What is the repeated addition sentence that represents the following picture? *points: 1*



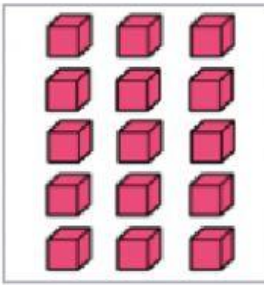
- ☐ $5+5+5+5+5$
- ☐ $4+4+4+4+4$
- ☐ $4+4+4$

7. What is the repeated addition sentence that represents the following picture? *points: 1*



- ☐ $2+2+2+2+2$
- ☐ $5+5+5$
- ☐ $2+2$

8. What is the repeated addition sentence that represents the following picture? *points: 1*



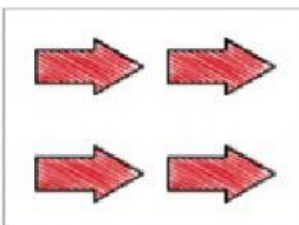
- ☐ $3+3+3+3+3$
- ☐ $3+3+3$
- ☐ $5+5$

9. What is the repeated addition sentence that represents the following picture? *points: 1*



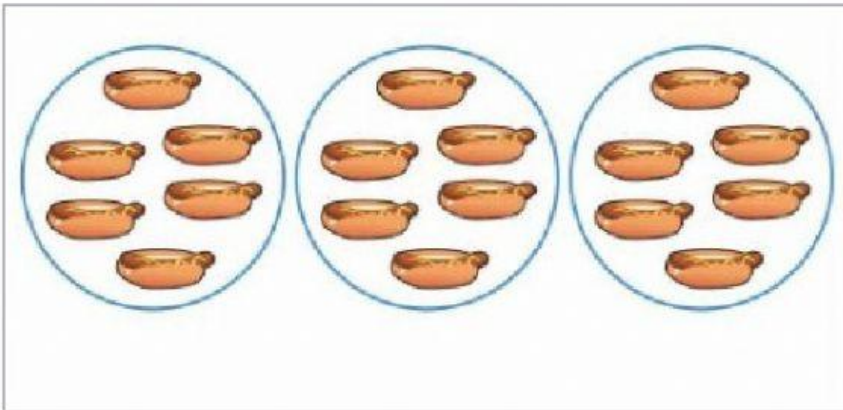
- ☐ $2+2+2+2$
- ☐ $3+3+3$
- ☐ $4+4+4$

10. What is the repeated addition sentence that represents the following picture? *points: 1*




- ☐ $1+1$
- ☐ $2+2$
- ☐ $3+3$

11. What is the repeated addition sentence that represents the following picture? *points: 1*



- ☐ $3+3+3$
- ☐ $7+7+7$
- ☐ $6+6+6$

12. What is the repeated addition sentence that represents the following picture? *points: 1*



- ☐ $3+3+3+3+3+3$
- ☐ $3+3$
- ☐ $4+4+4+4+4+4$