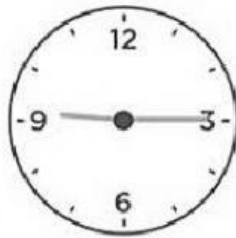
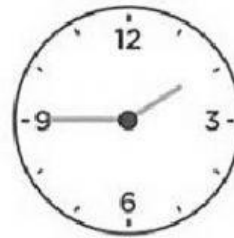


## WHAT TIME IS IT?


Match:



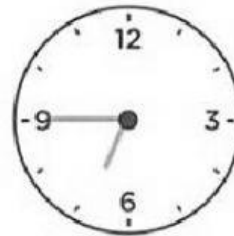
half past eleven



half past eight




four o'clock



a quarter past twelve




a quarter to two



a quarter past nine




a quarter to seven

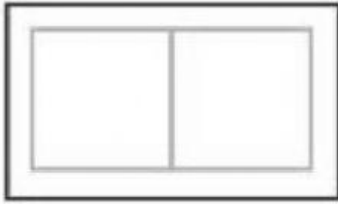


one o'clock


Write the time in numbers:




*It's six o'clock.*




*It's half past three.*




*It's a quarter past eight.*



*It's a quarter to nine.*



*It's half past six.*



*It's a quarter to five.*

Write the time:



*It's seven o'clock.*

.....



.....



.....



.....



.....



.....



.....