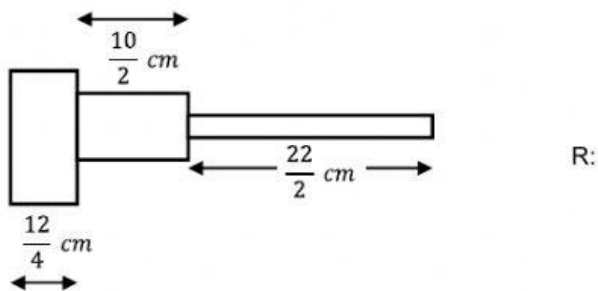
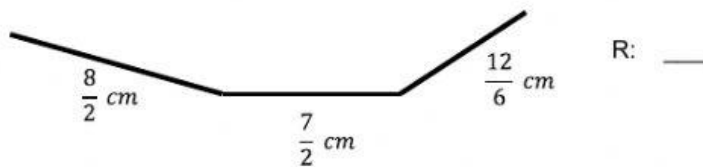
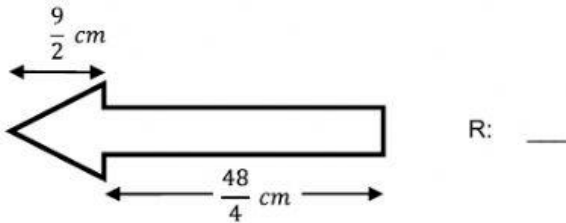
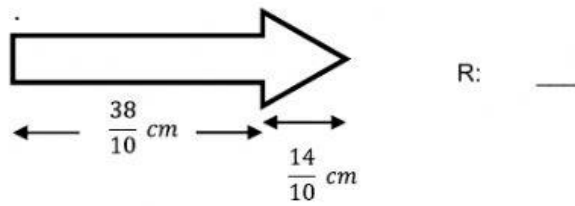


6.- **PROBLEMAS:** Encuentra la medida del largo de los siguientes objetos.



7.- Suma:

$$\frac{5}{6} + \frac{7}{5} = \text{____}$$

$$\frac{5}{9} + \frac{4}{7} = \text{____}$$

$$\frac{3}{20} + \frac{2}{5} + \frac{7}{4} = \text{____}$$