

Math

Evaluation II

1st semester School Year 2022-2023
Primary I



Name :

Class :

Date :

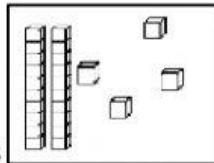
Period :

Nilai	TTG	TTO

A. Choose the correct answer.

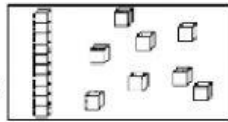
1.

- a. 2 tens, 4 ones
- b. 4 tens, 2 ones
- c. 10 tens, 4 ones




2.

- a. 1 ten, 9 ones
- b. 9 tens, 1 ones
- c. 1 ten, 8 ones



3. The picture shows

- a. 1 ten, 4 ones
- b. 1 ten, 6 ones
- c. 10 ten, 6 ones



4. $9 - 3 =$

- a. 6
- b. 4
- c. 12

5. $3 + 6 =$

- a. 2
- b. 6
- c. 9

6. $9 - 6 =$

- a. 2
- b. 3

c. 7

7. $5 - 3 = \dots$

- a. 2
- b. 3
- c. 5

8. This is a

- a. nickle
- b. 1 cent
- c. penny



9. $5 + 5 = \dots$

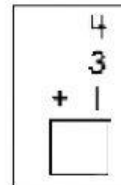
- a. 10
- b. 15
- c. 25

10. $5 \dots 2$

- a. <
- b. >
- c. =

11.

- a. 8
- b. 7
- c. 6



12. What time is it?

- a. 08:00
- b. 09:00
- c. 12:00



13. The amount is ...

- a. 5 cents
- b. 10 cents
- c. 15 cents



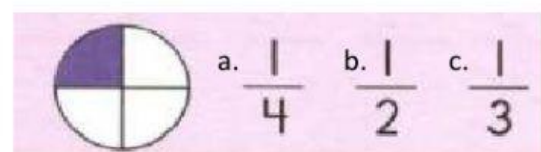
14. $7 \dots 9$

- a. >
- b. <
- c. =

15. The correct counting by 10s is

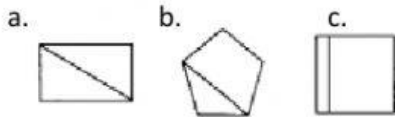
- a. 10, 20, 30, 50, 40
- b. 10, 20, 30, 40, 50
- c. 10, 30, 20, 40, 50

16. What is coloured




- a. $\frac{1}{4}$
- b. $\frac{1}{2}$
- c. $\frac{1}{3}$


17. Which is cut into 2 equal part?



18. Which animal weighs less?



19. Which animal weighs more?



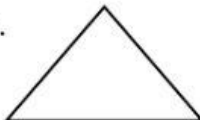
20. What time is it?

- a. 05:00
b. 12:09
c. 09:00




B. Count the side and corners of each shape and circle the correct answer.



21.  4 5 6 sides
4 5 6 corners

22.  3 5 6 sides
3 5 6 corners

23.  3 5 6 sides
3 5 6 corners

24.  3 5 6 sides
3 5 6 corners

C. Count the tally marks and write the correct number.

25.  _____ 26.  _____

27.  _____ 28.  _____

D. Read and solve

29.  5 were eating grass. All 5 hopped away.

How many grasshoppers were still eating grass?



_____ grasshoppers were still eating grass.

30.  2 were sipping nectar. 4 more butterflies came.

How many butterflies were sipping nectar?



_____ butterflies were sipping nectar.