

Name: _____ Class: _____ Date: _____

CHAPTER


9

Length

Practice 1 Measuring in Metres

- (1) Look at the pictures.
Fill in the blanks with **more** or **less**.

(a)



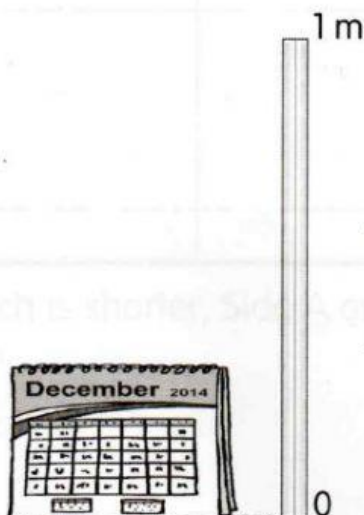
The length of the rope is _____ than 1 m.

(b)






The length of the bicycle is
_____ than 1 m.

(c)



The height of the calendar is
_____ than 1 m.

- (2) Look at the table below.
 Tick (✓) the columns that are true.
 You will need a metre stick or a 1-metre string to measure some items.

Object	Less Than 1 m	More Than 1 m
Classroom whiteboard 		
Desk 		
Computer monitor 		
Dustbin 