

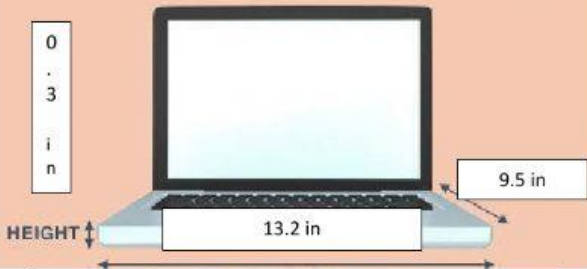



OBJECT DIMENSIONS

Instructions. Complete the following information.

| | |
|--|---|
|  | <p>How tall and long is the Roman Colosseum?</p> <p>It is _____ x _____.</p> <p>It is _____ tall and _____ long.</p> |
|  | <p>How deep is the Death Sea?</p> <p>It is _____.</p> <p>It is _____ deep.</p> |

| | |
|---|--|
|  <p>Diagram of a laptop. A vertical scale on the left shows the height is 0.3 in. A horizontal scale below the laptop shows the length is 13.2 in. A diagonal scale on the right shows the width is 9.5 in.</p> | <p>How tall, long and wide is the computer?</p> <p>It is _____ x _____ x _____.</p> <p>It is 0.3 in _____, 13.2 in _____, and 9.5 in _____.</p> |
|  <p>Diagram of a house model. A vertical scale on the right shows the height is 3 m. A horizontal scale on the left shows the length is 8 m. A horizontal scale at the bottom shows the width is 4.5 m. The INFONAVIT logo is visible in the background.</p> | <p>How tall, long and wide is the INFONAVIT house?</p> <p>It is _____ x _____ x _____.</p> <p>It is 3 m _____, 4.5 m _____, and 8 m _____.</p> |