









Lindopark Primary: Term 2 Week 7: Mathematics: Home-Test: Friday

1. Drag / write the time to the correct clock


Quarter to 3	10 past 3	Quarter past 3	10 to 3
20 past 6	20 to 1	7 O clock	20 past 5
			
			

2. Choose the correct answer


1.	There are _____ days in 1 year	365	364	300
2.	There are _____ months in 2 years	12	24	48
3.	There are _____ hours in 2 days	24	12	48
4.	There are _____ minutes in 1 hour	120	60	30
5.	The month before May is?	March	June	April
6.	The month after May is?	April	June	July
7.	There are _____ days in two weeks	7	14	21
8.	There are _____ weeks in 1 year	52	100	12

Complete the following: Write in the time above and under each clock

2 o' clock



2:00




←


1 hour earlier

→


1 hour later



4 o' clock



4:00




←

1 hour earlier

→

1 hour later



Choose the correct answer

↘

⤵

↙

?


↘

⤴

⤵


↗

2. Calculate the following using the breaking up method



145 + 254 =

		H	T	U
	=		+	+
	=		+	+
	=		+	+



455 - 144 =

		H	T	U
	=		+	+
	=		+	+
	=		+	+