

Name: \_\_\_\_\_

Date \_\_\_\_\_

1. Write the following lengths in feet

a. 36 in. \_\_\_\_\_ ft.

b. 24 in. \_\_\_\_\_ ft.


c. 48 in. \_\_\_\_\_ ft.

d. 72 in. \_\_\_\_\_ ft.

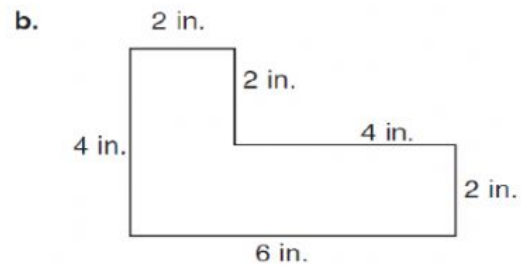
e. 108 in. \_\_\_\_\_ ft.

f. 12 in. \_\_\_\_\_ ft.



2. Find the perimeter of these shapes.



P = \_\_\_\_\_



P = \_\_\_\_\_



Activar Windows  
Ver la confirmación

2. Change from feet to inches.

a.  $\frac{1}{2}$  ft. = \_\_\_\_\_ in.

b. A Yard fabric cost \$2. What is the cost of half a yard? \_\_\_\_\_