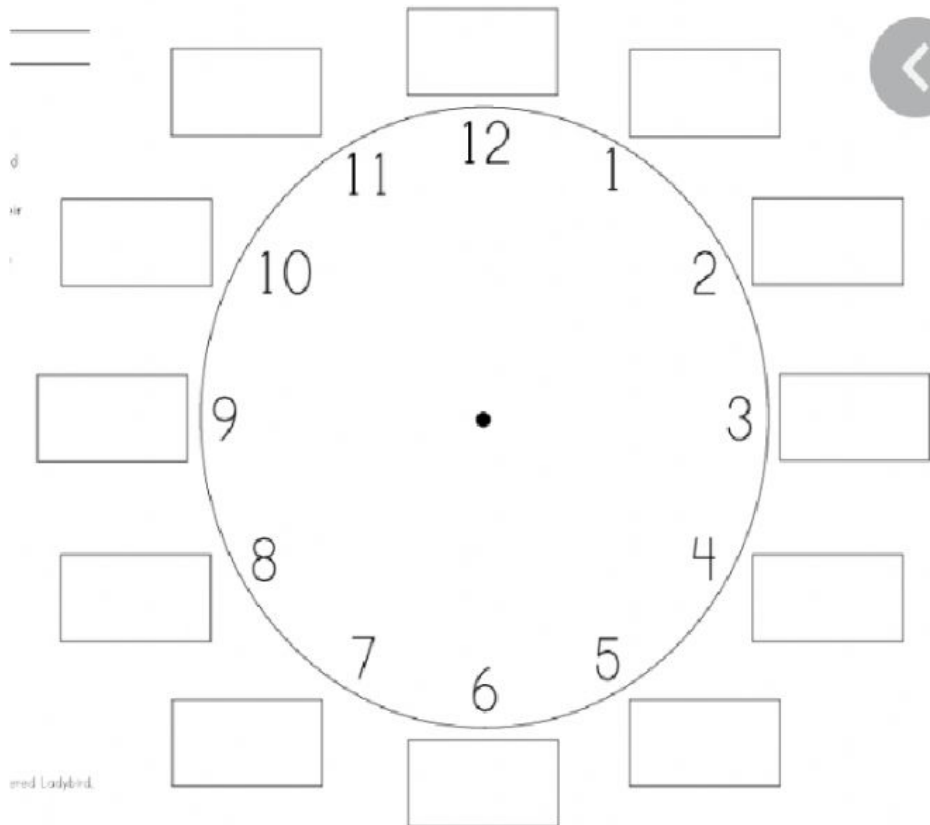


Name: _____ Date: _____

Mathematics

Time

Complete the clock with the correct 24 hour time



A.

Name _____

Date _____



CONVERTING 12- TO 24-HOUR CLOCK TIMES SHEET 2

1) Convert these times into 24 hour clock times.

| 12 hour | 24 hour |
|---------|---------|
| 3:25am | 03:25 |
| 7:20am | |
| 8:05am | |
| 12:20am | |
| 1:16am | |
| 4:56am | |
| 10:42am | |
| 12:51am | |

| 12 hour | 24 hour |
|---------|---------|
| 3:25pm | |
| 7:20pm | |
| 8:05pm | |
| 12:20pm | |
| 1:16pm | |
| 4:56pm | |
| 10:42pm | |
| 12:51pm | |

B.

Write the correct 24 hour clock time with each analogue clock.

| | | | |
|--|--|--|--|
| | | | |
| | | | |

Name _____

Date _____



CONVERTING 24- TO 12-HOUR CLOCK TIMES SHEET 2

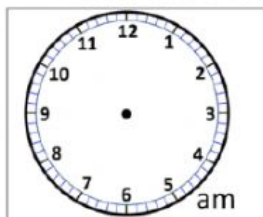
1) Convert these 24-hour times into am and pm times.

| 24-hour | 12-hour |
|---------|---------|
| 13:25 | 1:25pm |
| 10:50 | |
| 16:41 | |
| 05:37 | |
| 12:10 | |
| 09:29 | |
| 17:02 | |

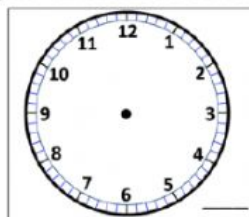
| 24-hour | 12-hour |
|---------|---------|
| 18:53 | |
| 22:05 | |
| 07:54 | |
| 00:17 | |
| 02:50 | |
| 21:12 | |
| 23:46 | |

2) Draw the correct time on the clock faces to match the 24 clock time.

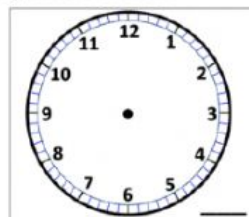
Write down 'am' or 'pm' in the bottom corner of each clock.



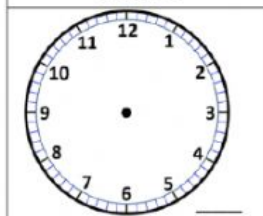
06:25



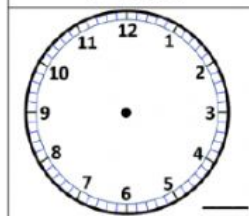
14:50



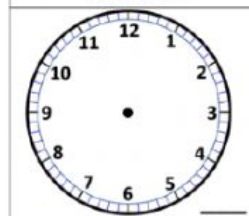
00:15



18:05



22:20



15:55



Free Math Sheets, Math Games and Math Help

MATH-SALAMANDERS.COM

