

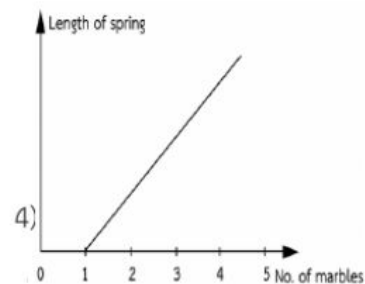

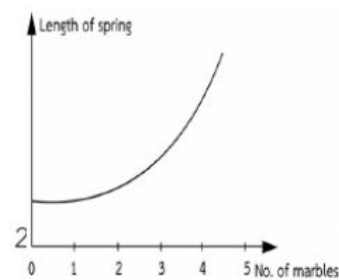



84. A student placed marble on the spring to affect its length.

The results are in the table shown below.

| | | | | | |
|-----------------------|---|-----|---|-----|---|
| Number of marble | 0 | 1 | 2 | 3 | 4 |
| Length of spring (cm) | 3 | 3.5 | 4 | 4.5 | 5 |

Which of the following graphs shows the results that the pupils obtained?



85. Four identical iron cubes were put on the top of each wooden ramp as in the diagrams below. In which of the following would the iron cube possess the most kinetic energy?

