

1. What number comes next? Click the icon to record your answers.









- a. 99
- b. 999
- c. 1,999
- d. 9,999
- e. 99,999
- f. 999,999

2. Fill in the gaps of the text below to complete the information about the Millennium Development Goals. (source: <https://www.mdgmonitor.org/millennium-development-goals/>)

The Millennium Development Goals (MDGs) are the eight goals _____ (establish) by the United Nations in September 2000.

In that year, _____ (there to be) the Global Summit when 149 international leaders _____ (sign) the Millennium Declaration. They _____ (agree) to combat disease, hunger, poverty, illiteracy, discrimination against women and environmental degradation by 2015.

ARRESTE as Metas do Milênio e SOLTE-as nos seus ícones correspondentes:

Reduce child mortality	Eradicate extreme poverty and hunger	Improve maternal health	A global partnership for development
Promote gender quality	Combat HIV, malaria and other diseases	Ensure environmental sustainability	Achieve universal primary education
 1	 2	 3	 4
 5	 6	 7	 8

3. Read parts adapted from the report of the results achieved, published in 2015, by MDG Monitor, and fill in the blanks with the correct verb form.



LATIN AMERICA AND CARIBE

*This report has just been published to all nations that are part of the MDG agreement.
April 15, 2015*

- a. Between 2005 and 2010, 3.6 million hectares of forest _____ (be) lost per year.
- b. From 1990 to 2014. The percentage of protected areas _____ (increase).
- c. Between 1992 and 2014, the proportion of people suffering from hunger in the region _____ (reduce) from 15.3 percent to 6.1 percent.
- d. The region _____ (continue) to suffer massive deforestation.
- e. The entire region _____ (make) significant gains towards eradicating hunger.
- f. The total number of people living with hunger _____ (decline) in the region.
- g. Mortality in the region _____ (reduce) from 54 deaths per 1,000 births to 17.
- h. The entire region _____ (make) impressive gains in relation to increasing access to primary education.
- i. The Latin America and the Caribbean region has the largest number of nations that _____ (achieve) a number of MDG targets.