



UNIT 2

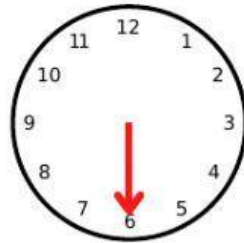


What's the time?



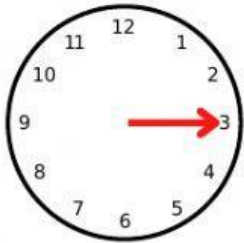
:00

It's HOUR
o'clock



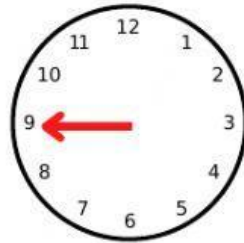
:30

It's half
past HOUR



:15

It's a quarter
past HOUR



:45

It's a quarter
to NEXT
HOUR

7:00 It's seven o'clock

9:00 _____

7:15 It's a quarter past seven

4:15 _____

7:30 It's half past seven

6:30 _____

7:45 It's a quarter to eight

11:45 _____

6:00 It's

12:00 _____

2:30 It's

1:30 _____

10:45 It's

12:45 _____

3:15 It's

2:15 _____

8:30 It's

9:30 _____