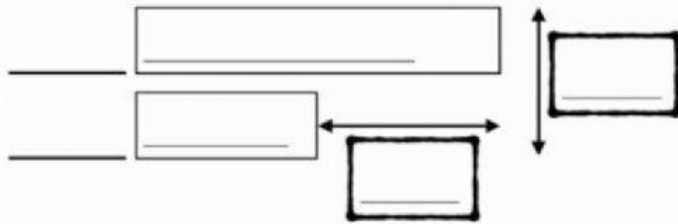


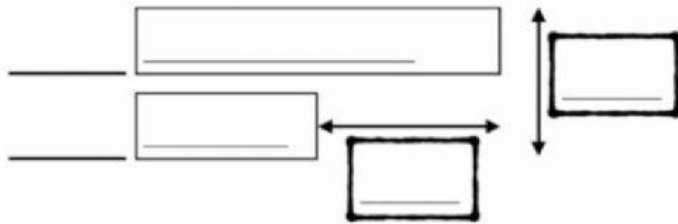
Name :  
Class :  
Date :

- 1) Maya learned 12 new words on Monday. She learned 6 more words than that on Sunday. How many words did she learn altogether?



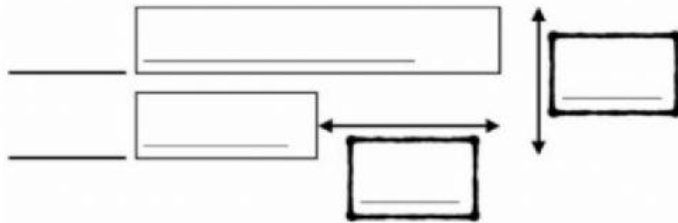
Monday
Sunday
6 words
12 words
18 words
30 words

- 2) Shadow and Braxton weigh 50 kg altogether. Shadow weighs 31 kg. How many fewer kg does Braxton weigh than Shadow?



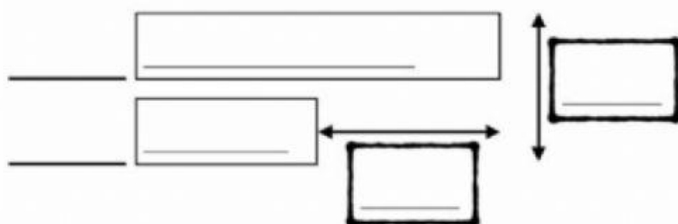
Shadow
Braxton
12 kg
31 kg
50 kg
19 kg

- 3) Tracy has 41 songs on her mp3 player. She has 23 rock songs. The rest are jazz songs. How many fewer jazz songs does Tracy have?



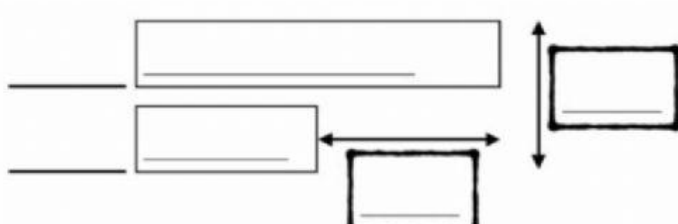
Jazz songs
Rock songs
18 songs
5 songs
23 songs
41 songs

- 4) Sparky and Patrick collected 46 sand shells. Sparky collected 30 of them. How many more sand shells did Sparky collect than Patrick?



Sparky
Patrick
16 sand shells
46 sand shells
14 sand shells
30 sand shells

- 5) Griffin has 21 fewer markers than Emma. If Griffin has 12 markers, how many markers do the two friends have altogether?



Griffin
Emma
21 markers
33 markers
45 markers
12 markers