





Test Social Science 7

1. Identify

Population decreases (-) Population increases (+) Emigration Immigration

<div data-bbox="301 454 735 504" style="border: 1px solid black; height: 20px; width: 100%;"></div> <p>Natural growth</p>  <p>New babies are born.</p>	<div data-bbox="828 454 1262 504" style="border: 1px solid black; height: 20px; width: 100%;"></div> <p>Natural movements</p>  <p>Some people die in Villanueva.</p>
<div data-bbox="276 884 531 934" style="border: 1px solid black; height: 20px; width: 100%;"></div>  <p>New people come and live in Villanueva.</p>	<div data-bbox="810 884 1066 934" style="border: 1px solid black; height: 20px; width: 100%;"></div>  <p>Some people leave the town to live in other places.</p>

2. Identify

Secondary sector

Tertiary sector

Primary sector

