

Name: \_\_\_\_\_

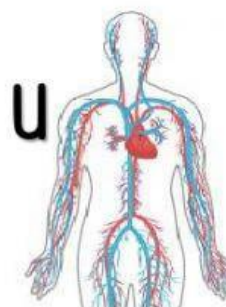
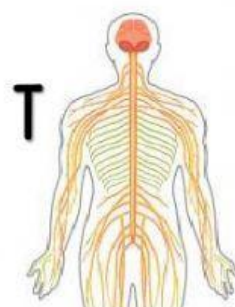
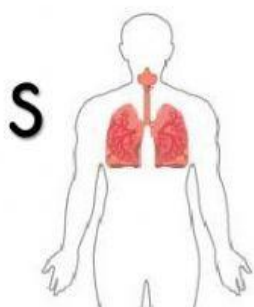
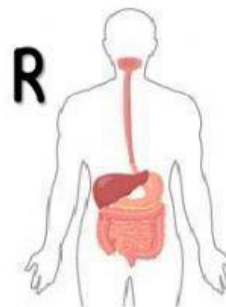
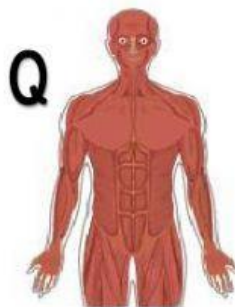
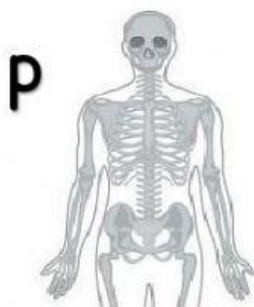
Date: \_\_\_\_\_

Class: \_\_\_\_\_

## Human Body System



- Study the different systems of a human body.



- Name the human body system shown above.

P	
Q	
R	
S	
T	
U	

- Which of the following systems match the description given below?

Choose the letter P, Q, R, S or T in the boxes provided.

	Description	System
a	This system is made of the skull, ribcage, backbone, arm bone and hipbone.	
b	This system consists of brain, spinal cord and the nerves.	
c	This system helps the body to break down food into smaller pieces.	
d	It is a system that pumps and transports blood to all parts of the body.	
e	This system takes in oxygen and remove carbon dioxide from the lungs.	
f	This system is made of muscles that helps the body to move and gives it posture.	