

AN INTRODUCTION TO ANGLES (ADVANCED WORK)

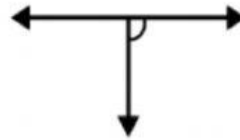
Classify each one of the following angles as right, straight, acute, obtuse or reflex:



(i)



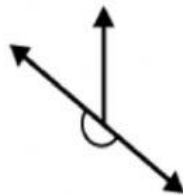
(ii)



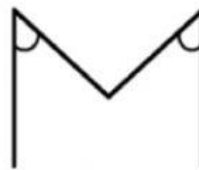
(iii)



(iv)



(v)



(vi)

- Match the following:

PART A	PART B
Straight Angle	Less than one fourth of a revolution
Right Angle	More than half of a revolution
Acute Angle	Half of a revolution
Obtuse Angle	One fourth of a revolution
Reflex Angle	Between $\frac{1}{4}$ and $\frac{1}{2}$ of a revolution