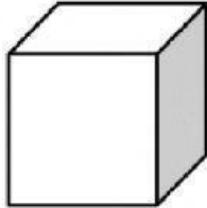
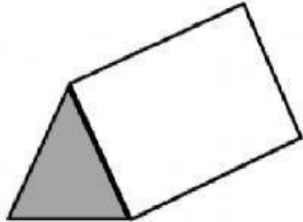
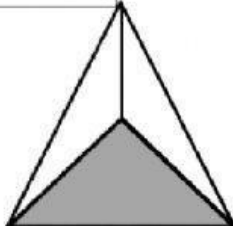

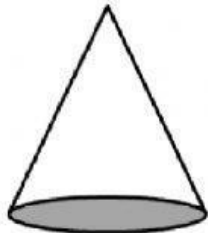
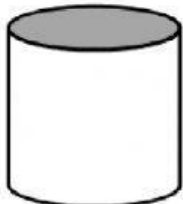
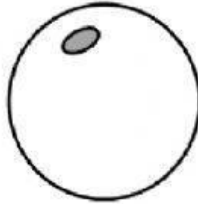
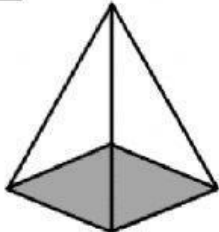


Fill in the name, and number of faces, edges and vertices for each shape.

<p>CUBE</p> <p>Faces:</p> <p>Edges:</p> <p>Vertices:</p> 	<p>PRISM</p> <p>Faces:</p> <p>Edges:</p> <p>Vertices:</p> 
<p>TRIANGULAR PYRAMID</p> <p>Faces:</p> <p>Edges:</p> <p>Vertices:</p> 	<p>CUBOID</p> <p>Faces:</p> <p>Edges:</p> <p>Vertices:</p> 
<p>CONE</p> <p>Faces:</p> <p>Edges:</p> <p>Vertices:</p> 	<p>CYLINDER</p> <p>Faces:</p> <p>Edges:</p> <p>Vertices:</p> 
<p>SPHERE</p> <p>Faces:</p> <p>Edges:</p> <p>Vertices:</p> 	<p>SQUARE PYRAMID</p> <p>Faces:</p> <p>Edges:</p> <p>Vertices:</p> 



cylinder square pyramid
cube sphere

triangular pyramid cuboid
triangular prism cone

