



GRADE 4 - TEST

Theme 1: Numbers

Full name:

School:

Class:

Mark

Part 1

- 2 questions -

Look and read. Put a tick (✓) or a cross (✗) in the box.
There are two examples.

Examples

$$\begin{array}{cccc} 2 & 0 & + & 9 \\ = & 2 & 9 & \end{array}$$

Twenty plus nine is
twenty-nine.



This is a square.



Questions

①

$$\begin{array}{cccc} 6 & 0 & + & 5 \\ = & ? & & \end{array}$$

Sixty plus five is twenty-one.

☐

②




This is an oval.

☐

Part 2

- 2 questions -

Look and read. Write **Yes** or **No**.



Examples

I can see two stars.

Yes

I can see three circles.

No

Questions

① I can see four ovals. _____

② I can see three rectangles. _____

Part 3

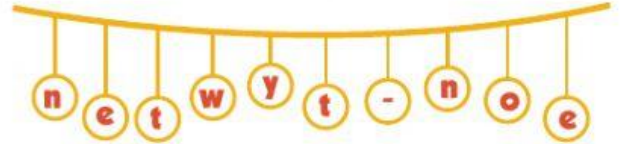
- 2 questions -

Look at the pictures. Look at the letters. Write the words.

Example



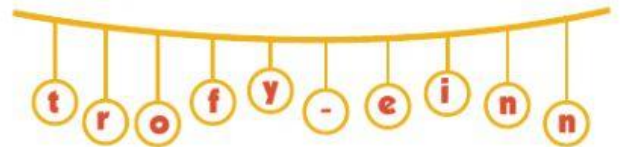
twenty-one



Questions

①





②





Part 4

- 2 questions -

Read this. Choose a word from the box. Write the correct word next to numbers 1-2. There is one example.



Shapes are everywhere! Look, the window is a square, and the (1) _____ is a rectangle. The (2) _____ is a circle and the football is an oval.

Example



square



photo



basketball



football

Part 5

- 2 questions -

**Look at the pictures and read the questions.
Write one-word answers.**



Examples

How many balloons are there?

There are four balloons.

What shape is the window?

It's a square.



Questions

1. How old is Max?

He's _____ years old.

2. What shape is the cake?

It's a _____.