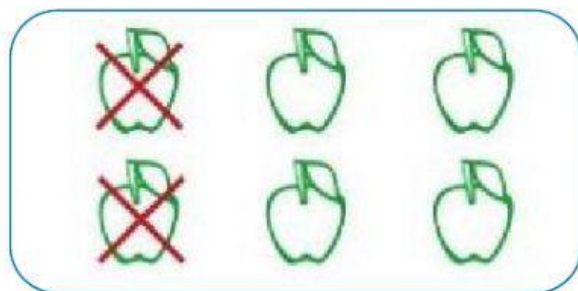


PRIME SOTTRAZIONI...


OSSERVA LE IMMAGINI E SCRIVI I NUMERI




$$\square - \square = \square$$



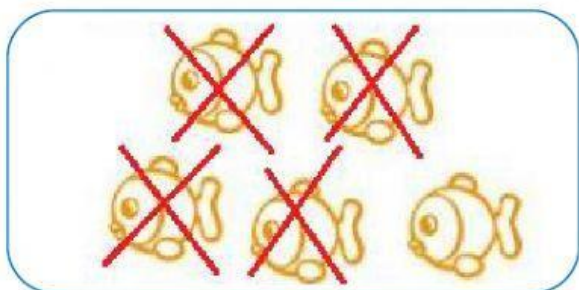
$$\square - \square = \square$$



$$\square - \square = \square$$



$$\square - \square = \square$$



$$\square - \square = \square$$



$$\square - \square = \square$$

