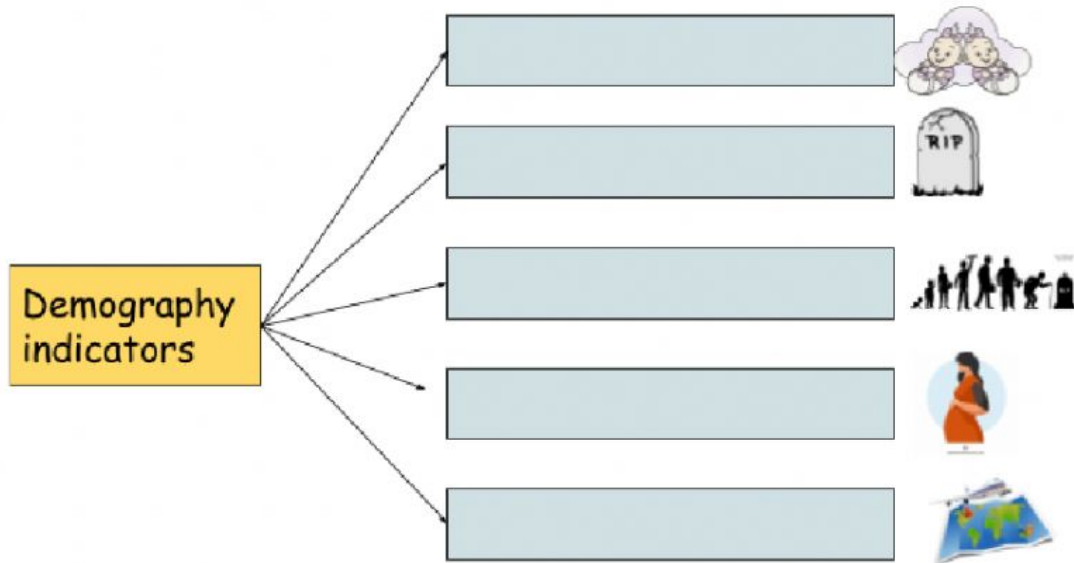


# Population


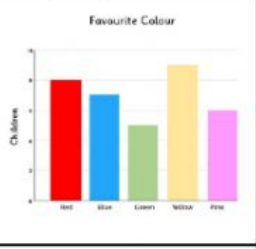

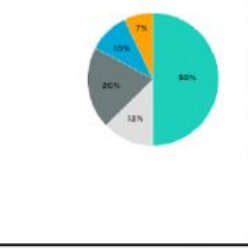
Complete the definition:

- **Demography** is the study of .....
- **Population density** is the ..... number of people living in each ..... of an area.
- ..... is when rural areas have got a decreasing population.

Complete:



Name the types of graphs:

Complete:

birth rate

death rate

life expectancy

fertility rate

migration

Average number of children per woman	
Number of people dying in a year for every 1000 people	
Number of years a person is expected to live	
Number of babies born in a year for every 1000 people	
People moving from a country to another	

What two types of migration are there? Answer

..... → people coming to live in a new country

..... → people leaving their country to live in another country.



Say if the following statements are true (T) or false (F)

\_\_\_ China has a very low population.

\_\_\_ Spain has a low birth rate

\_\_\_ Rural areas have a lower population density than urban areas.

\_\_\_ A country needs a fertility rate of 2.1 to maintain its population size.

\_\_\_ Life expectancy in Europe is higher now than it was in the past.

\_\_\_ Women in Spain have more babies now than in the past.