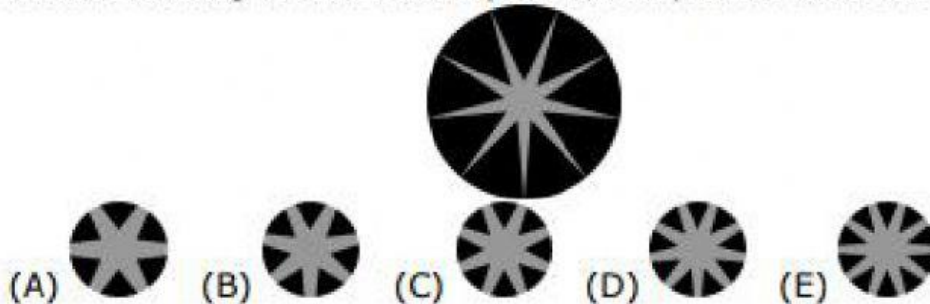
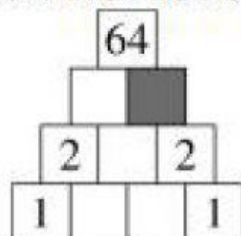


1. Which drawing is the central part of the picture with the star?



2. Jacky wants to insert the number 3 somewhere between the digits of the number 2014, to make a five-digit number that is as small as possible. Where should Jacky insert the number 3?
- (A) in front of 2014                      (B) between the 2 and the 0  
 (C) between the 0 and the 1            (D) between the 1 and the 4  
 (E) at the end of 2014
3. When Koko the Koala is not sleeping, he eats 50 grams of leaves per hour. If Koko slept 20 hours yesterday, how many grams of leaves did he eat?
- (A) 0            (B) 50            (C) 100            (D) 200            (E) 400
4. Adam built fewer sandcastles than Martin but more than Susan. Lucy built more sandcastles than Adam and more than Martin. Dana built more sandcastles than Martin but fewer than Lucy. Who built the most sandcastles?
- (A) Martin    (B) Adam    (C) Susan    (D) Dana    (E) Lucy
5. Monica writes numbers in the diagram so that each number is the product of the two numbers below it. Which number should she write in the grey cell?


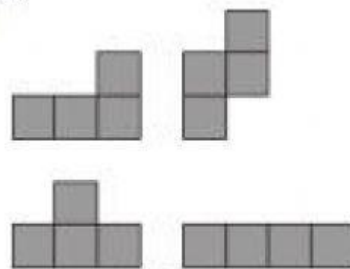


- (A) 0            (B) 1            (C) 2            (D) 4            (E) 8




9. There were some candies in a bowl. Sally took half of the candies. Then Tom took half of the candies left in the bowl. After that, Clara took half of the remaining candies. In the end there were 6 candies in the bowl. How many candies were there in the bowl at the beginning?  
 (A) 12      (B) 18      (C) 20      (D) 24      (E) 48

10. Ann has four pieces as shown.



With these pieces she can completely cover the shape:

Where should she put the piece ?

