





SCIENCE III LONG QUIZ

Choose the correct answer for the following questions.

Direction: Identify the following pictures.

1.  a. brain b. lungs c. heart
2.  a. lungs b. liver c. kidney
3.  a. kidneys b. lungs c. brain
4.  a. brain b. lungs c. heart

Direction: Identify the organs described for each number.

5. It pumps blood.

- a. blood b. heart c. lungs

6. It is the control center of the body.

- a. heart b. liver c. brain

7. It takes in oxygen from the air we inhale through the nose.

- a. lungs b. kidney c. stomach

8. It removes waste from the blood.

a. stomach

b. kidneys

c. liver

9. It carries nutrients and oxygen to all cells in the body.

a. kidney

b. blood

c. lungs

10. It is the gas we breathe in.

a. carbon dioxide

b. nitrogen

c. oxygen

11. It is the gas we breathe out.

a. carbon dioxide

b. nitrogen

c. oxygen

12. It is the process of changing the food we eat into a form the body can use.

a. breathing

b. digestion

c. excretion

II – Order the process of Digestion by writing 1 – 6.

_____ The stomach breaks the food down into nutrients.

_____ The Esophagus pushes the food down to the stomach.

_____ We chew the food with our teeth.

_____ The large intestine takes waste to the anus.

_____ The waste goes through the anus.

_____ The small intestine separates the nutrients from the waste
and absorbs the nutrients

III – Label the parts of the Digestive System.

WORD BANK

rectum
pancreas
liver

large intestine
small intestine
mouth

esophagus
stomach

