


# SULLA LINEA DEI NUMERI

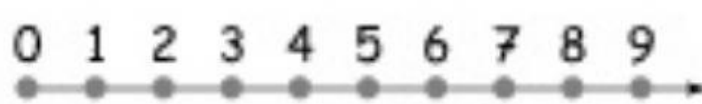
Esegui le addizioni sulla linea dei numeri seguendo l'esempio.




$$3 + 4 = \dots 7$$




$$6 + 3 = \dots$$




$$0 + 5 = \dots$$



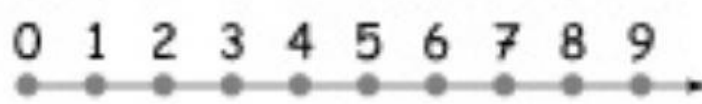
$$8 + 1 = \dots$$



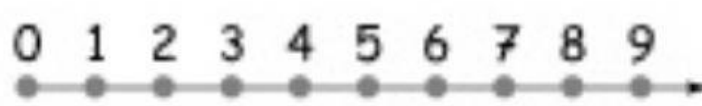
$$7 + 2 = \dots$$




$$0 + 8 = \dots$$



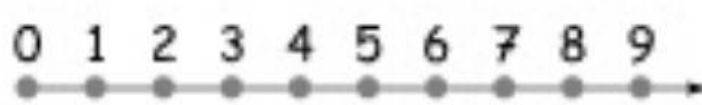
$$3 + 6 = \dots$$



$$5 + 4 = \dots$$



$$7 + 1 = \dots$$



$$4 + 4 = \dots$$

