

Họ và tên:
Lớp:

Thứ ngày tháng năm
Phiếu Ôn Violympic Toán TA – Số 1

Exercise 1: Tick ✓ .

a. How many eggs are there?



3

4

5

6

b. How many dolphins are there?



3

4

5

6

c. How many pineapples are there?



8

7

6

5

d. How many elephants are there?



4

5

6

7

e. How many chickens are there?



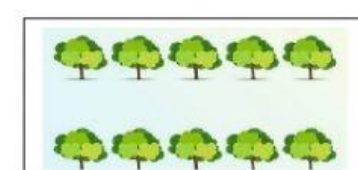
2

3

4

5

f. How many trees are there?



10

9

8

7

g. How many flowers are there?




3

4

5

9

h. How many bees are there?



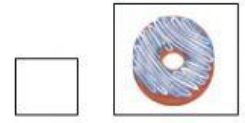
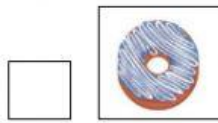
9

6

5

3

i. Choose the different picture.



k. How many dogs are there?



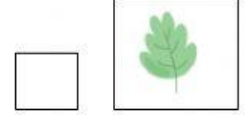



1

2

3

4

m. Choose the different picture.



Exercise 2: Number?

a. How many bears are there?



b. How many babies are there?



c. How many children are there?



d. How many candies are there?



e. How many cupcakes are there?



f. There are/is ... cake(s) in the picture?



g. How many fish are there?



h. How many ducks are there in the picture?



i. There are/is ... candle(s) in the picture.



j. There are/is ... mushroom(s) in the picture.



k. There are/is ... pot(s) in the picture.



l. There are/is ... flower(s) in the picture?

