




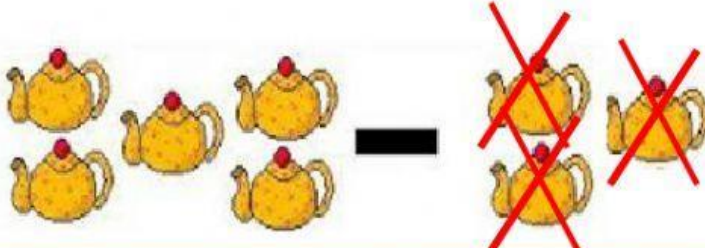


## PRIME SOTTRAZIONI...

OSSERVA LE IMMAGINI E SCRIVI I NUMERI

	$\boxed{4} - \boxed{2} = \boxed{2}$
	$\boxed{\phantom{0}} - \boxed{\phantom{0}} = \boxed{\phantom{0}}$
	$\boxed{\phantom{0}} - \boxed{\phantom{0}} = \boxed{\phantom{0}}$
	$\boxed{\phantom{0}} - \boxed{\phantom{0}} = \boxed{\phantom{0}}$
	$\boxed{\phantom{0}} - \boxed{\phantom{0}} = \boxed{\phantom{0}}$
	$\boxed{\phantom{0}} - \boxed{\phantom{0}} = \boxed{\phantom{0}}$



*Maestra Gabry*