

7. Can You See the Pattern? Math Worksheet-2

Name: _____

Class: V

1. What is the growth or reduce interval for the following sequence?

(a) 2, 4, 6, 8, 10, 12, 14, 16, 18, 20

These numbers grow by

(b) 45, 40, 35, 30, 25, 20, 15, 10, 5

These numbers reduce by

(c) 5, 10, 15, 20, 25, 30, 35, 40, 45

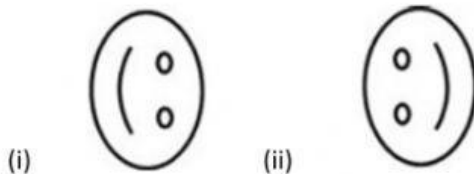
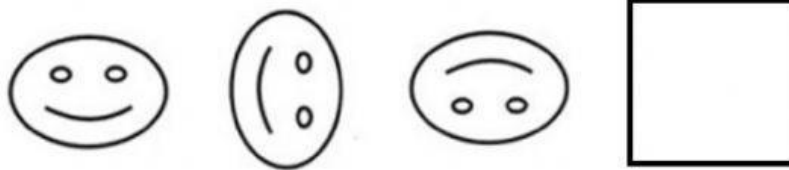
These numbers grow by

(d) 27, 24, 21, 18, 15, 12, 9, 6, 3

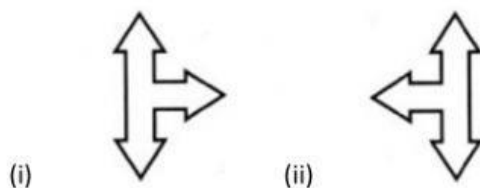
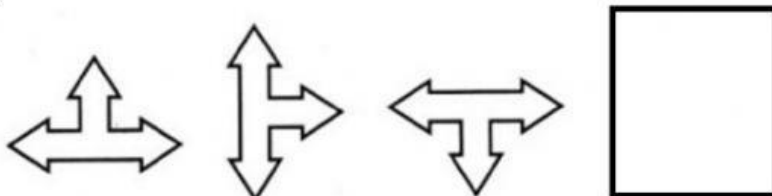
These numbers reduce by

2. Complete the following pattern:

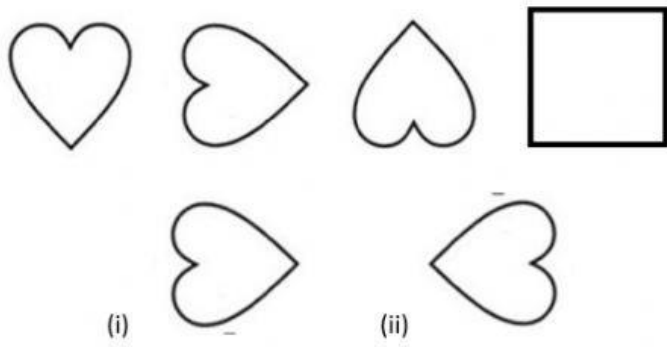
a)



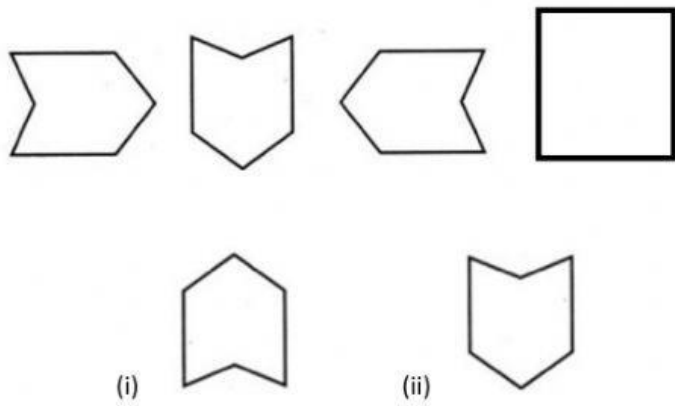
b)



c)



d)



e)

