

7. Can You See the Pattern?

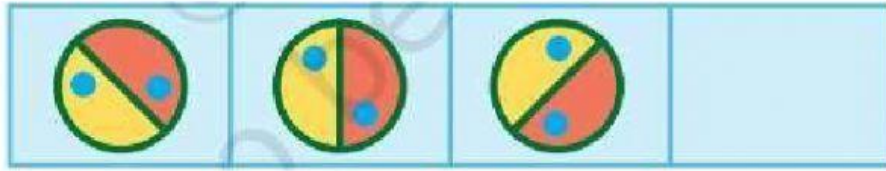
Math Worksheet – 1

Name: _____

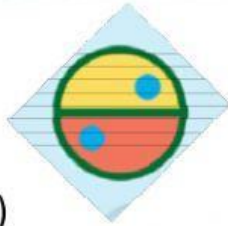
Class: V

I. What comes next?

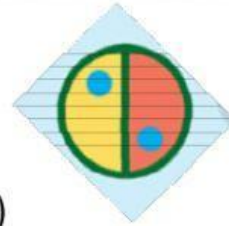
1.



a)



b)



2.




a)



b)



3.



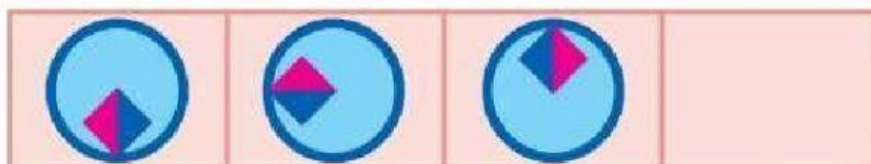
a)




b)



4.



a)



b)



5.



a)



c)



II. Fill in the blanks:

(a) $20 + \dots + \dots = 34 + 24 + 20.$

(b) $\dots + 42 + \dots = 65 + \dots + 80.$

(c) $200 + 300 + \dots = \dots + 400 + \dots .$

(d) $\dots + 52 + \dots = 62 + \dots + 42 .$

(e) $20 + \dots + \dots = 40 + 30 + \dots .$