











Name:

Class: 1A8

Task 1: Put a tick in the correct box.

1. Which one is bigger ? 	6. Which one is smaller ? 
2. Which one is smaller ? 	7. Which one is bigger ? 
3. Which one is bigger ? 	8. Which one is smaller ? 
4. Which one is smaller ? 	9. Which one is bigger ? 
5. Which one is smaller ? 	10. Which one is bigger ? 

Task 2: Circle

1. Circle the **circle** shaped objects.

2. Circle the **triangle** shaped objects.

3. Circle the **square** shaped objects.

4. Circle the **rectangle** shaped objects.

