

LKPD
TEMA 3
SUBTEMA 3

PEMBELAJARAN 6
PERTEMUAN 1

NAMA :

KELAS :



Pilihlah satuan waktu yang biasa digunakan!

Menit

Gram

Kilometer

Jam

Kilogram

Ons

Meter

Detik

Pasangkanlah jam dengan waktu yang sesuai!



•



•



•



•



•



•

•

•

•

•

•

•

06:05

10:45

07:40


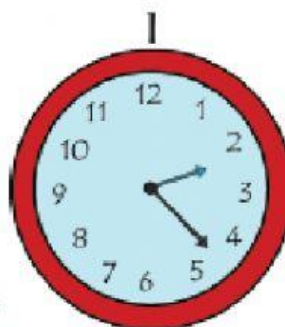
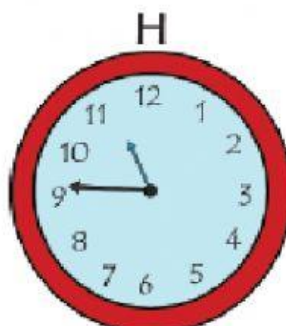

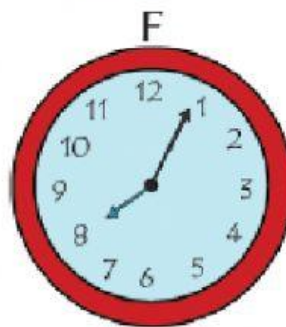

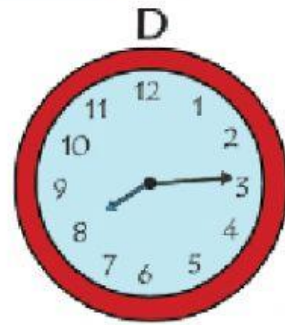
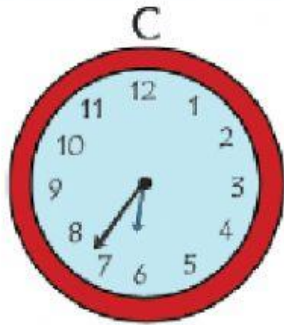
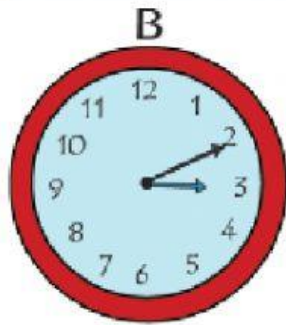
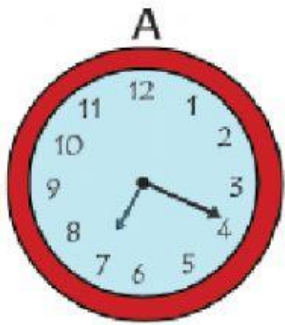
08:20

01:15

05:10



LANJUTKAN DENGAN MEMASANGKAN JAM BERIKUT INI!



08:15

02:22

04:55

07:19

01:42

12:36

03:12

08:04

06:37

11:47

