





Name: \_\_\_\_\_ Post-synchronous Activity  
Grade & Section: \_\_\_\_\_ Week 5 Math Kinder 2

I. Answer the question by encircling the correct answer. Tick the correct picture.

<p>1. Which animal is heavier?</p> 	<p>3. Which fruits is lighter?</p> 
<p>2. Which object is lightest?</p> 	<p>4. Which object is heaviest?</p> 

5. Which object is heavier?

