

Periods of Time - Revision

TASK 1: Match the dates with the END of each period.

(Draw a line to the period which ends with this date.)







TASK 2: Now draw a line to the **EVENT** which marks the END of each period.

1492	476	1789	5000 BC
------	-----	------	---------

Early Modern Period	Prehistory	Contemporary Era	Middle Ages	Antiquity
---------------------	------------	------------------	-------------	-----------

Fall of the Western Roman Empire	French Revolution	Invention of Writing	Discovery of America by Christopher Columbus
----------------------------------	-------------------	----------------------	--

TASK 3: WRITE the NAME of the period below each picture.

First man on the moon.			First mobile phone
	Martin Luther led the Protestant Reformation		Abbeys, monasteries, churches and cathedrals were built.
	First Television		Gutenberg invented the printing press. (1450)

	There were 8 major crusade expeditions between 1096 and 1291.		First Computer
	Jethro Tull invented the seed drill. (1701)		Ziggurats were built in Mesopotamia
	The Olympic Games were created.		Cold War
	The Black Death		The Egyptians
	Diderot wrote the Encyclopedia of Sciences		The ideas of the Renaissance spread throughout Europe from Italy.
	The Greeks		The industrial revolution began in England after 1760.
	Knights and Castles		Julius Caesar defeated the Gauls.

	Ukraine War		The ideas of the 'Enlightenment' (lumières) spread through Europe from Paris.
	Magellan first sailed around the world		Leonardo Da Vinci worked as an engineer, architect and scientist.

TASK 4: WRITE the **NAME** of the period below each picture.

1. a) Which period of time ends with the discover of the Americas by Christopher Columbus? b) When? _____

2. a) Which period of time ends with the invention of writing?
_____ b) When? _____

3. a) Which period of time ends with French Revolution? _____
b) When? _____

4. a) Which period of time ends with the Fall of the Western Roman Empire?
_____ b) When? _____

TASK 5: We can say that the periods of time correspond to a certain era. Choose the appropriate era for each period.

Prehistory

Antiquity

Middle Ages

The Early Modern Period

The Contemporary Era

