


Párvulos

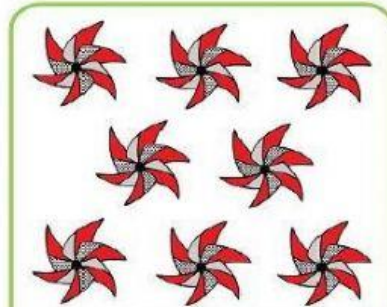
Desarrollo del pensamiento lógico

¿Cuántos hay?


Cuenta los elementos de cada conjunto y marca el número que le corresponde.



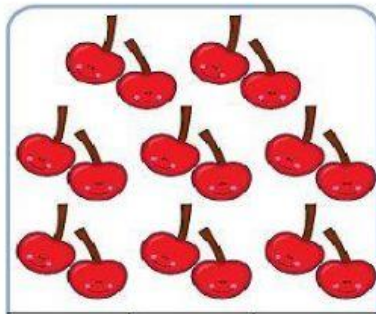
5	6	7
---	---	---




6	9	8
---	---	---



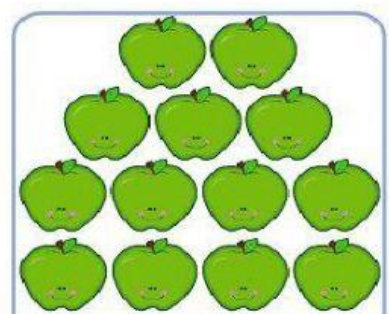
15	14	16
----	----	----



16	18	20
----	----	----



13	14	15
----	----	----



13	12	14
----	----	----

Arrastra los números para ordenarlos de menor a mayor.



11	9	10
----	---	----

		
---	--	---



Arrastra los números para ordenarlos de mayor a menor.



15	12	10
----	----	----

		
---	--	---

Responde correctamente las siguientes sumas.

$$\begin{array}{r} + 5 \\ 9 \\ \hline \end{array}$$

$$\begin{array}{r} + 6 \\ 8 \\ \hline \end{array}$$

$$\begin{array}{r} + 2 \\ 6 \\ \hline \end{array}$$

$$\begin{array}{r} + 7 \\ 7 \\ \hline \end{array}$$

$$\begin{array}{r} + 7 \\ 5 \\ \hline \end{array}$$

$$\begin{array}{r} + 3 \\ 8 \\ \hline \end{array}$$

$$\begin{array}{r} + 4 \\ 4 \\ \hline \end{array}$$

$$\begin{array}{r} + 5 \\ 5 \\ \hline \end{array}$$

$$\begin{array}{r} + 5 \\ 4 \\ \hline \end{array}$$

$$\begin{array}{r} + 3 \\ 3 \\ \hline \end{array}$$

