

SCHOOL TIMETABLE

1. WATCH THE VIDEO.

2. WHAT'S THE TIME? CHOOSE.



3. WHAT'S THE TIME? DRAG & DROP

It's quarter past five.

It's two o'clock.

It's half past seven.

It's quarter to five.

It's half past eight.

It's quarter to three.

























It's quarter past three.

It's one o'clock.





4. WRITE THE MISSING LETTER. out for capital letters!

	MONDAY	TUESDAY	WEDNESDAY	THURSDAY	FRIDAY
	nglish 	aths 	istory 	nglish 	ciencie 
Break					
	aths 	istory 	ciencie 	aths 	nglish 
Lunch time					
	eography 	usic 	PE 	eography 	rt 
	PE 	ciencie 	aths 	ciencie 	aths 

5. LISTEN & REPEAT. LOOK AT THE TIMETABLE & ANSWER.



- What time is English on Monday? _____
- What time is History on Tuesday? _____
- What time is Science on Thursday? _____
- What time is Geography on Thursday? _____
- What time is English on Friday? _____

NOW MAKE QUESTIONS.

- _____ It's at nine o'clock.
- _____ It's at quarter to eleven.
- _____ It's at quarter past one.
- _____ It's at half past two.