





PHIẾU BÀI TẬP TOÁN CUỐI TUẦN 2

1. Số ?

| | |
|---|--|
|  <div style="display: flex; justify-content: space-around; width: 100%;"> 16 17 18 </div> |  <div style="display: flex; justify-content: space-around; width: 100%;"> 16 17 18 </div> |
|  <div style="display: flex; justify-content: space-around; width: 100%;"> 18 19 20 </div> |  <div style="display: flex; justify-content: space-around; width: 100%;"> 18 19 20 </div> |

2. Số ?

a.

| | | | | | | | |
|---|----|----|--|----|----|--|--|
| 9 | 10 | 11 | | 13 | 14 | | |
|---|----|----|--|----|----|--|--|

b.

| | | | | | | | |
|----|----|--|--|----|----|--|----|
| 20 | 19 | | | 16 | 15 | | 13 |
|----|----|--|--|----|----|--|----|

c.

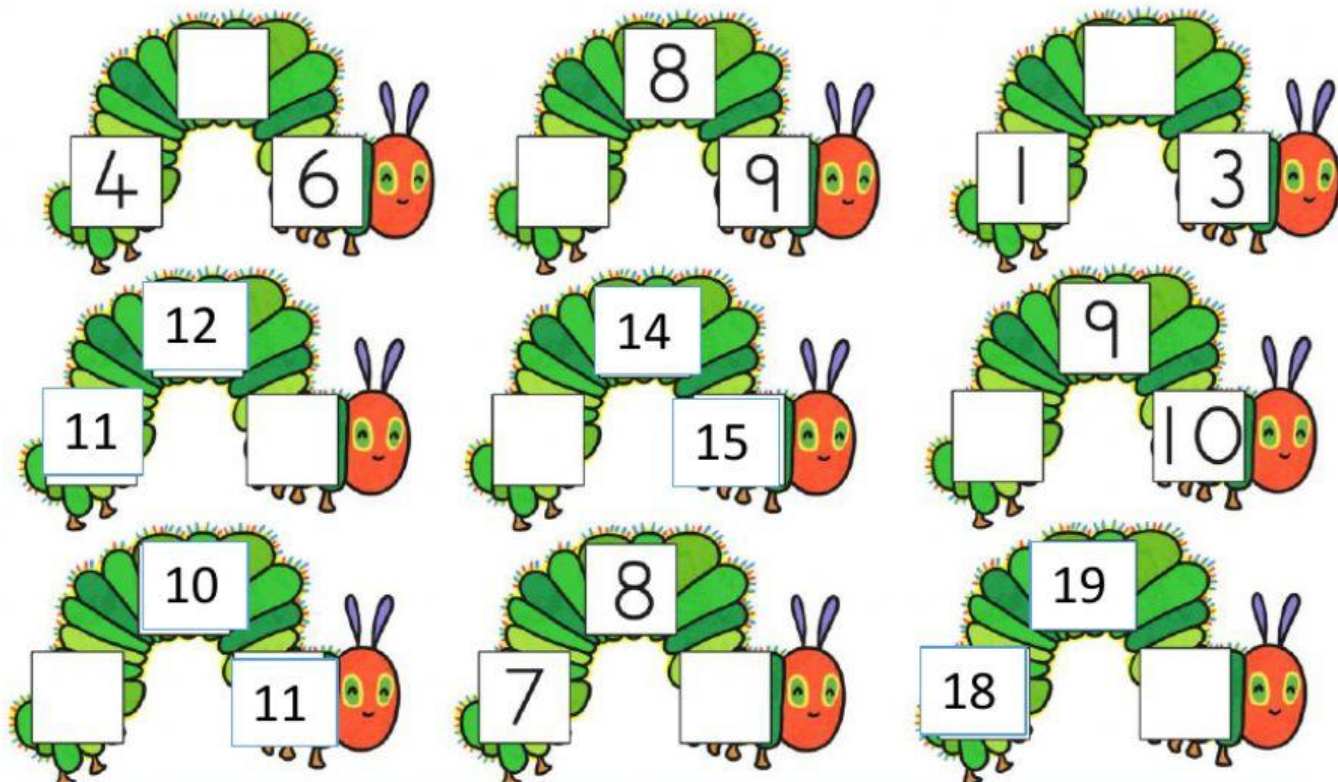
| | | | | | | | |
|----|----|--|----|--|----|--|--|
| 12 | 13 | | 15 | | 17 | | |
|----|----|--|----|--|----|--|--|

d.

| | | | | | | | |
|--|----|--|----|--|--|----|----|
| | 16 | | 14 | | | 11 | 10 |
|--|----|--|----|--|--|----|----|



3. Số ?



Chúc các con làm bài tốt!