









## SUBTRACTION WORD PROBLEMS

<p>1) Jack has 6 apples. He gives 3 apples to Bella. How many apples are left with Jack?</p>	 $-$  $=$ <input type="text"/> <input type="text"/> <input type="text"/> apples
<p>2) There are 4 pens in a box. Tia takes out 2 pens from the box. How many pens are left in the box?</p>	 $-$  $=$ <input type="text"/> <input type="text"/> <input type="text"/> pens
<p>3) Sam has 7 stars. He gives 2 stars to Ben. How many stars are left with Sam?</p>	 $-$  $=$ <input type="text"/> <input type="text"/> <input type="text"/> stars
<p>4) There are 8 fishes in a pond. 5 fishes swim away. How many fishes are left in the pond?</p>	 $-$  $=$ <input type="text"/> <input type="text"/> <input type="text"/> fishes