

## Application\_Grade-3\_Time

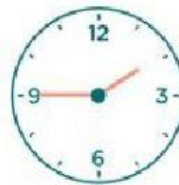
### Half Past, Quarter Past, and Quarter To

### WHAT TIME IS IT?

Look and match.



half past eleven



half past eight



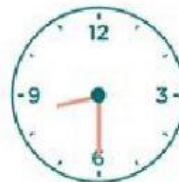
four o'clock



a quarter past twelve



a quarter to two



a quarter past nine















a quarter to seven



one o'clock

Write down the correct time in digital.

	5 minutes later	9:05		10 minutes earlier	
	10 minutes earlier			15 minutes later	
	20 minutes later			1 hour earlier	
	1 hour later			30 minutes later	
	15 minutes earlier			25 minutes earlier	
	20 minutes earlier			30 minutes earlier	