





Concept_KinderGarden_Subtraction Word Problem**Word Problems**



- 1) Mary has 6 cherries. She eats 2 of them. How many cherries are left?


$$\square - \square = \square$$

- 2) There are 8 orange slices in a plate. Pam eats 3 of them. How many orange slices are there in the plate now?


$$\square - \square = \square$$

- 3) Tina has 5 candies. She gave 4 of them to Rosy. How many candies are left with Tina?


$$\square - \square = \square$$