




















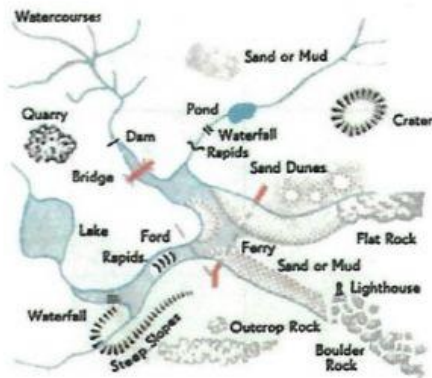


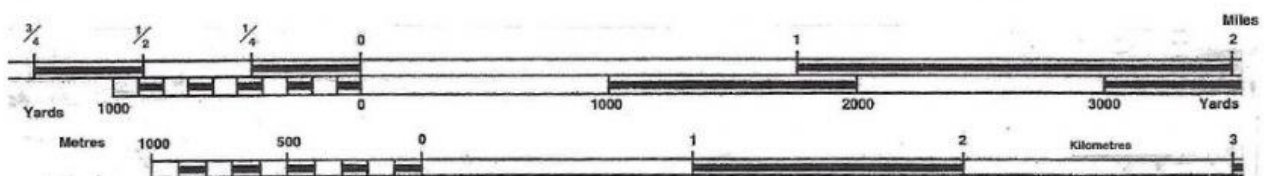
MAP WORK EXERCISE

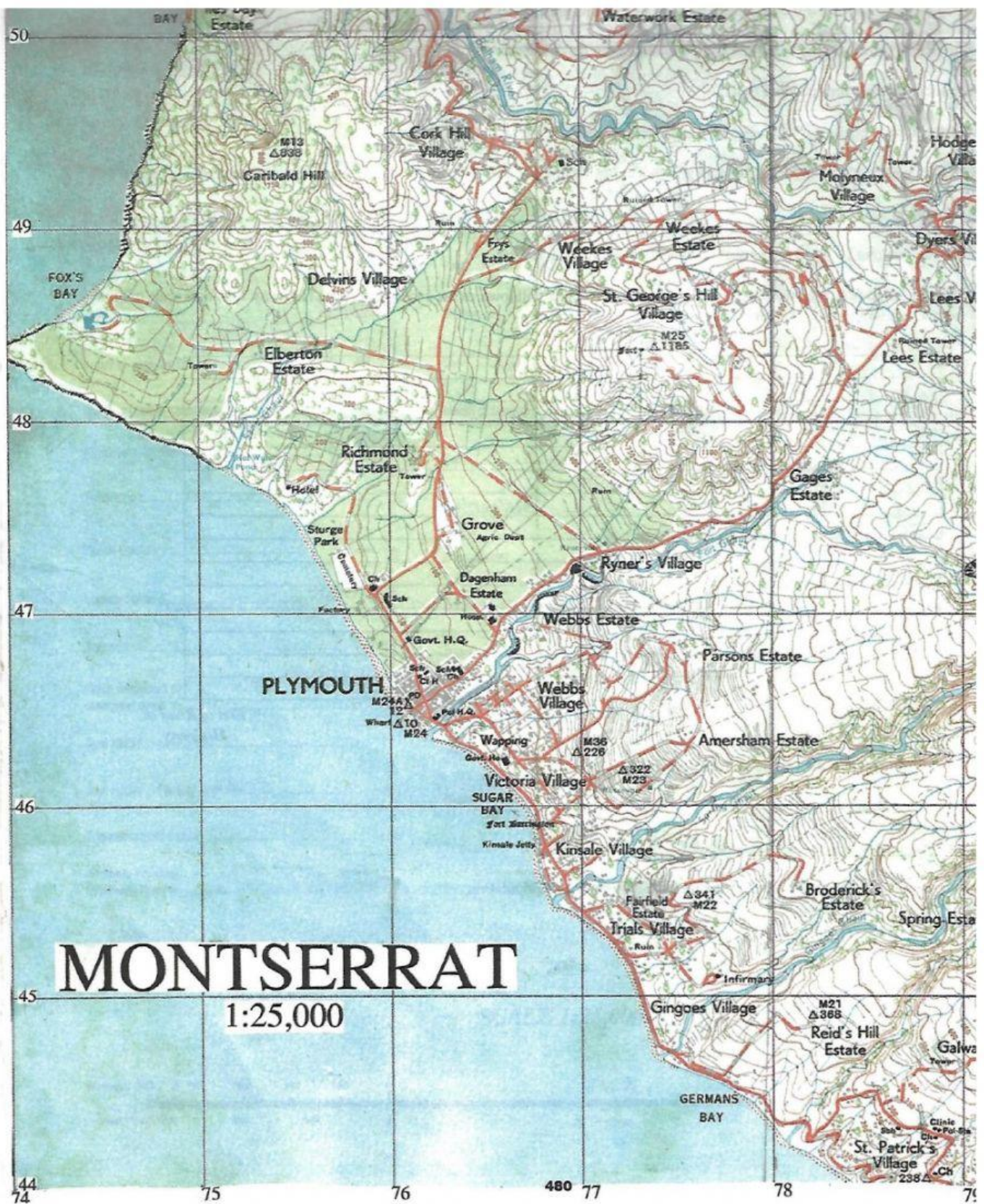
Please study the Map of Montserrat on a scale of 1:25,000 then complete the following exercise.

Main motable Roads.....		Bridge 	Trigonometrical Stations:- Main	
Secondary motable Roads.....			Trigonometrical Stations:- Minor	
Other Roads and Track (non motable)			Heights in feet given to ground level	101
Footpaths.....			Contours (Vertical Interval 50')	
Named Buildings			Forest, Thicket and Scrub Woodland	
Police Station		Pol Sta	Dispersed trees amongst Settlements	
Post, Telegraph Office.....		PT	Hedges and Terraces	
Hospital		Hosp	Cliffs, Scree and Land-slips	
Church, Chapel, School		Ch Cha Sch	Plantations (Sugar Cane, Limes, Coconuts etc.)	
Court House, Hotel		Ct H H		
Fences, Walls				
Water Tank		WT		





SCALE 1:25,000





What is the grid reference of the following places?

	Place	4 figure grid reference	6 figure grid reference
1	Richmond Estate Hotel		
2	Mouth of Sand Ghaut river		
3	Mouth of Fort Ghaut River		
4	M36 		
5	Trails Village Ruin		
6	St. Patrick Village Ch.		
7	St. Patrick Village 		

State what is located at the following 6 figure grid references:

	6 figure grid reference	Place
1	773484	
2	754494	
3	788440	
4	776455	
5	770463	
6	769494	
7	789441	
8	773453	