
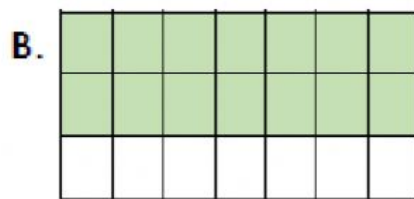


Simplify Fractions

4. Which image will simplify to the fraction below?

$$\frac{5}{7}$$



5. Complete the fractions below so they simplify to $\frac{7}{8}$.

$$\frac{21}{\square}$$

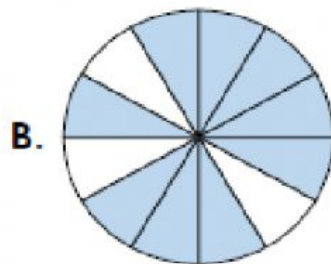
$$\frac{\square}{56}$$

$$\frac{42}{\square}$$

$$\frac{\square}{16}$$

6. Spot the odd one out.

A. $\frac{12}{16}$



C. $\frac{21}{28}$

