




Treble Clef Worksheet


Write the name of each note on the line beneath the staff




Copyright © 2013 EarTrainingandImprov.com. All rights reserved. For home and private teacher use only.
May not be sold, reproduced or transmitted in any form without the expressed written permission of the publisher.


Bass Clef Worksheet

Write the name of each note on the line beneath the staff










Copyright © 2013 EarTrainingandImprov.com. All rights reserved. For home and private teacher use only.
May not be sold, reproduced or transmitted in any form without the expressed written permission of the publisher.



Music Math - Level 1



(Add the beats)



Notes

1.  +  = _____



2.  +  = _____



3.  +  = _____

4.  +  = _____



5.  +  = _____

6.  +  = _____



7.  +  = _____



8.  +  = _____



9.  +  = _____



10.  +  = _____



Rests



11.  +  = _____



12.  +  = _____



13.  +  = _____



14.  +  = _____



15.  +  = _____

16.  +  = _____

17.  +  = _____

18.  +  = _____

19.  +  = _____

20.  +  = _____





















Music Math - Level 2

(Add the beats)





















$$\text{Dotted Quarter} = \text{Quarter} + \left(\frac{1}{2} \text{Quarter}\right)$$

$$\text{Dotted Half} = \text{Half} + \left(\frac{1}{2} \text{Half}\right)$$

Notes

1.  +  = _____
2.  +  = _____
3.  +  = _____
4.  +  = _____
5.  +  = _____
6.  +  = _____
7.  +  = _____
8.  +  = _____
9.  +  = _____
10.  +  = _____

Rests

11.  +  = _____
12.  +  = _____
13.  +  = _____
14.  +  = _____
15.  +  = _____
16.  +  = _____
17.  +  = _____
18.  +  = _____
19.  +  = _____
20.  +  = _____