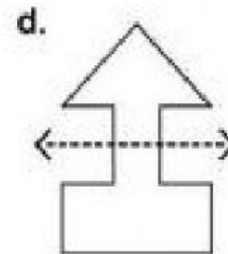
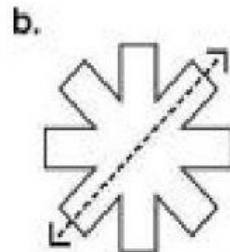
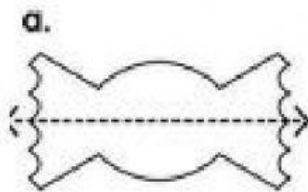


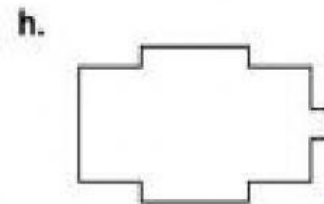

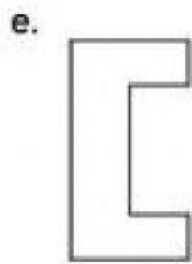
Name: _____

Symmetry

Tell whether the dotted line on each shape represents a line of symmetry. Write yes or no.



Draw a line of symmetry on each shape.



Draw the second half of each symmetrical shape.

