



# RESTAS.

Completa las restas ayudándote de los dibujos.

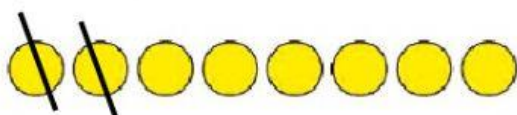
$$6 - 2 = \underline{\quad}$$



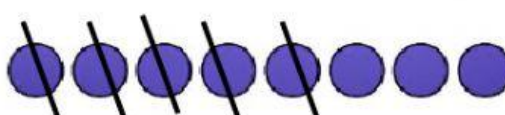
$$7 - 3 = \underline{\quad}$$



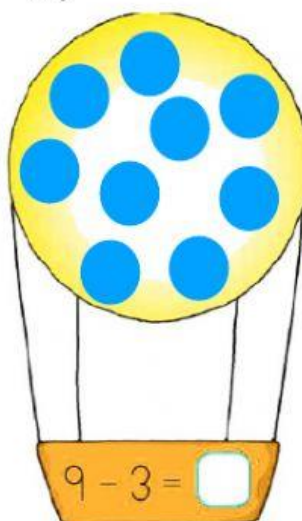
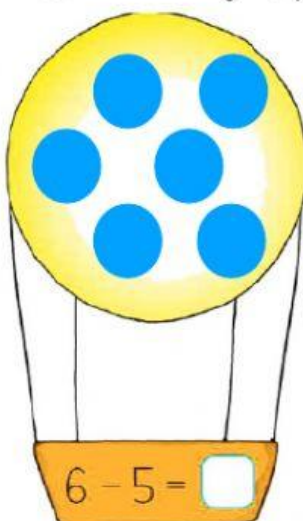
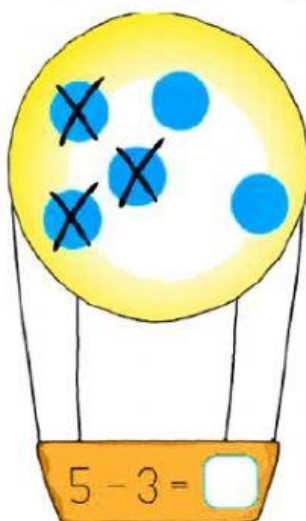
$$8 - 2 = \underline{\quad}$$



$$8 - 5 = \underline{\quad}$$



Tacha mentalmente, como en el ejemplo, y calcula:



Une y resuelve las restas.

$$6 - 3 = \underline{\quad}$$



$$6 - 2 = \underline{\quad}$$



$$5 - 2 = \underline{\quad}$$



Haz estas restas. Usa fichas si lo necesitas.

$$8 - 6 = \underline{\quad}$$

$$9 - 4 = \underline{\quad}$$

$$9 - 5 = \underline{\quad}$$

$$7 - 5 = \underline{\quad}$$

$$8 - 2 = \underline{\quad}$$

$$7 - 4 = \underline{\quad}$$