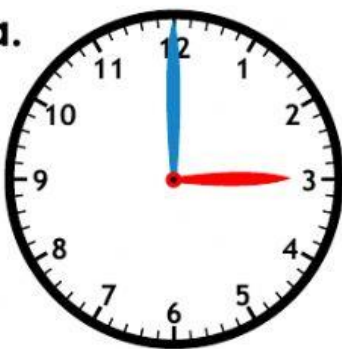


Name: \_\_\_\_\_

## Telling Time

Write the time shown.

a.



\_\_\_\_\_

-----

\_\_\_\_\_

b.

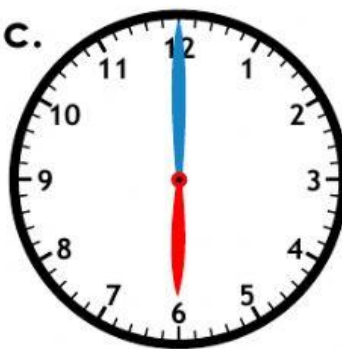


\_\_\_\_\_

-----

\_\_\_\_\_

c.



\_\_\_\_\_

-----

\_\_\_\_\_

d.




\_\_\_\_\_

-----

\_\_\_\_\_

e.



\_\_\_\_\_

-----

\_\_\_\_\_

f.



\_\_\_\_\_

-----

\_\_\_\_\_