

# Maths

**WATCH THIS VIDEO:**

## **VERBALLY**

**Telling time to the half hour**

**Let's Learn**

Math  
Lab



It is 4 o'clock.



It is **half past** 4.

1.4  
3+

When the minute hand is at 6, we say **half past**.

# VERBALLY

Think  
About It



Yen

It is 6 o'clock.

No, it is half past 12.



Sam

Who is correct? Why?

## Let's Do

1. Look at the clocks.  
Fill in the missing numbers.

a)



It is \_\_\_\_\_ o'clock.

b)



It is half past \_\_\_\_\_.

c)



It is half past \_\_\_\_\_.

d)




It is half past \_\_\_\_\_.


## DRAW A LINE FROM THE CLOCK TO THE TIME



half past 6



half past 2




6 o'clock



half past 7



half past 10



5 o'clock

Click here:

